

Daily Language, Math, Geography, and Thinking Skills

Language Arts

1. i had gave him to quarters
2. sally doesnt want to read anns book
3. yesterday kim and me taked the ball home

Analogies

1. Morning is to A.M. as _____ is to P.M.
2. Banana is to tree as grape is to _____.

Math

1. How many different 3 different numbers contain all three of the digits 2,4, and 9? What are the numbers?
2. Write the numbers from problem 1 in order, from least to greatest.

Critical Thinking

1. When is an apple like a book?
(Hint: The answer is a homonym.)
2. Change 1, 2, and 3 to three different letters of the alphabet so that each of these numbers will become a word.
123 312 231

Language Arts

1. we saw them people while walking in shorewood park
2. he has teached school worked in a factory and drived a bus
3. there is people who doesnt like halloween

Analogies

1. _____ is to pit as grape is to seed.
2. Shout is to yell as _____ is to doze.

Geography

1. Which is the largest ocean in the world? the smallest?
2. Look at a map of the Northern Hemisphere and find a lake. Now write a definition of a lake.

Math

1. Consider the number 812,367.
Write the number that is
 1. 1 greater
 2. 1 less
 3. 1,000 greater
 4. 10,000 less

Language Arts

1. i have learn that were next
2. in august he didnt never do good
3. barry got a new game that we can use

Analogies

1. Hospital is to patient as prison is to _____.
2. Bicycle is to two as tricycle is to _____.

Geography

1. Where would a person look on a map to find out what the symbols mean?
to find out which direction is north?
2. How many states are there in the United States?

Math

1. What is the third letter of the eighth word in this sentence?
2. What is the fifth letter of the fourth word in this sentence?
3. What is the second letter of the twelfth word in this sentence?

Critical Thinking

1. What starts with a p in the first word, ends with e in the second word and has thousands of letters in it?

Language Arts

1. i havent no short story called snowbound
2. hes reading the matchlock gun, my new book
3. mr and mrs roy anders
112 south street
mankato mn 56040

Analogies

1. Blacksmith is to iron as _____ is to wood.
2. Sweating is to heat as _____ is to cold.

Geography

1. Which state is farther north, Louisiana or New Mexico?
2. What does the symbol of a black dot on a map mean?

Math

1. How many three digit numbers contain only the digits 5 and 6?
What are they?
2. Write the 3 digit number described below.
The hundreds digit is twice the ones digit.
The tens digit is one greater than the hundreds digit.
The ones digit is an even number.

Critical Thinking

1. Find a two-syllable word whose letters you can rearrange to make a one-syllable word. (Hint: The answer is a four-letter word.)

Language Arts

1. yesterday he takes my copy of news parade, a good magazine
2. she said you slided it between joe and i
3. but yesterday i never give nothing to him

Analogies

1. Rear is to exit as front is to _____.
2. Ship is to sailor as _____ is to nurse.

Geography

1. Des Moines is to Iowa as _____ is to Oregon.
2. How many states border Lake Erie? What are their names?

Math

1. Which of the symbols +, -, x, or ÷ could go in each box?

1. $35 \square 0 = 35$	2. $35 \square 0 = 0$	3. $0 \square 35 = 0$
4. $35 \square 1 = 35$	5. $35 \square 35 = 1$	6. $35 \square 35 = 0$
2. In the year 2049, Christmas Day will be a Saturday. On what day of the week will New Year's Day, 2050, fall?

Critical Thinking

1. Find as many words as you can that end with **line**.

Daily Language, Math, Geography, and Thinking Skills

Language Arts

1. dear jane
we will arrive at the party at 7 00 pm
your friend
fran
2. dr jones she begun to treat the cut
3. we visited chicago last summer and we will visit detroit this fall

Analogies

1. egg: tadpole: : tadpole: _____
2. seem: appear: : want: _____

Geography

1. Name the seven continents of the world.
2. What is the map symbol for a national capital?

Math

1. Eric has a quarter and 6 pennies.
Paul has 2 dimes.
Adam has 4 nickels and 7 pennies.

How can they share the coins so that each person has the same amount of money?

Critical Thinking

1. What word is spelled wrong in every dictionary?

Language Arts

1. we wonder if he have the write book
2. but we wont here her if we set near the back
3. may and i dranked apple cider and sang this land is your land

Analogies

1. thousand: million: : 1,000: _____
2. man: run: : _____: slither

Geography

1. In what state does the Mississippi River flow into the Gulf of Mexico?
2. What ocean is west of North America and South America?

Math

1. Joanne went to a pet store. She saw 6 puppies, 25 fish, 4 kittens, and 15 birds. How many legs did those animals have?
2. There are square tables in the cafeteria. One person can sit at each side of a table. You want to push tables together to make one big table where 16 people can sit. How many tables will you see?

Critical Thinking

1. Start with the word **cage**. Make a new, two-syllable word by replacing just one letter with a different letter.
2. Find as many words as you can that end with **ship** but are not related to boats. Find at least seven words.

Language Arts

1. we went to bettys house to see felix, her pet
2. dad will leave you have the tools wood and nails
3. roger dont want to lose his copy of the poem called fog

Analogies

1. moon: lunar: : sun: _____
2. snow: cold: : _____: sweet

Geography

1. Name the four cardinal directions on the compass rose.
2. Which state has a longer border with Canada, New York or Montana?

Math

1. Draw a picture to show what $\frac{1}{2}$ means.
2. Draw a picture to show what $\frac{1}{4}$ means.
3. Draw a picture to show what $\frac{3}{4}$ means.
4. List these fractions in order, from least to greatest.

Critical Thinking

1. **Ten** has three, **five** has four, and **eight** has five. What are we talking about?
2. Why is the letter a like a fragrant flower?

Language Arts

1. i and my brother will visit england france and italy this summer
2. and she will left you borrow to comic books
3. dr mantey has took those people with her

Analogies

1. strawberry: grapefruit: : red: _____
2. sheep: _____: knife: knives

Geography

1. What color on a map would seem to be better for farmland, yellow or green?
2. What river forms a boundary between Texas and Mexico?

Math

1. In the problem shown, each letter stands for a different number.

1. If W is 2 and X is 3, what is Y?	W
2. If X is 7 and Y is 21, what is W?	4
3. If Y is 7, what is $W + X$?	X
	Y
2. The sum of two numbers is 15. The difference of the same two ~~numbers~~ is three. What are the numbers?

Critical Thinking

1. Why is the letter d like a sailor?

Language Arts

1. jakes dog has growed a lot this year
2. on monday july 2 1999 we will be in boston
3. did you leave champ, your dog, eat

Analogies

1. grocer: foods: : florist: _____
2. cow: cows: : ox: _____

Geography

1. What imaginary line is halfway between the North and South Pole?
2. What state is due east of Colorado and due north of Oklahoma?

Math

1. There are 23 students in the class. All but 9 went outside for recess. How many students stayed inside?
2. Suppose that you are facing west. If you turn left three times, then twice to the right, what direction is behind you?

Critical Thinking

1. What occurs once in a minute, twice in a moment, but not once in a hundred years?
2. What has an equal number of b's and e's in it and is a real sting?

Daily Language, Math, Geography, and Thinking Skills

Language Arts

1. yesterday barry and me break the window
2. miss jane brown
3202 main street
juneau ak 99801
3. we cant take bills friend to

Analogies


1. _____ : meter :: cent : dollar
2. cool : hot :: _____ : bright

Geography

1. What is a definition of a map?
2. What is the only Great Lake that is completely within the United States?

Math

1. In this diagram, what might the numbers in the circles mean?
2. What number should go in the empty circle?



Critical Thinking

1. What name of an odd number changes to even when its first letter is taken away?

Language Arts

1. he must of read the magazine article called the last seven days
2. either they havent no money or they dont want to buy popcorn
3. that boy had left other kids use the swings at parkside school

Analogies

1. tail: tale: : _____: eight
2. journey: trip: : spin: _____

Geography

1. What major river flows into the Mississippi River just north of St. Louis, Missouri?
2. What is the capital of Texas?

Math

1. Use the numbers 2, 5, and 3.
What is the least number you can get if you multiply two of the numbers and add the third to the product?
2. What is the greatest number you can get?

Critical Thinking

1. Find two consonants that can be written in the same order with each vowel to form five different words.

____a____
 ____e____
 ____i____
 ____o____
 ____u____

Language Arts

1. them people dont have very good manners
2. i have began to read stuart little, a good book
3. be sure to right 247 grand avenue fort dodge ia 51501 on the envelope

Analogies

1. girl: _____ : : boy: male
2. expensive: cheap: : success: _____

Geography

1. Which state has more land area, Iowa or New Hampshire?
2. What is the capital of Maryland?

Math

1. I am a number between 31 and 41. I am a multiply of 3. I am an even number. What number am I?
2. What kind of number do you get when you add
 1. two even numbers?
 2. two odd numbers?
 3. an even number and an odd number?

Critical Thinking

1. Name at least five parts of the human body that have three letter names.

Language Arts

1. my mothers freind growed a large pumpkin
2. were glad that you can come hear tomorrow
3. last night she sing the thanksgiving songs good

Analogies

1. $(5 + 7) : (10 + 2) :: (\underline{\hspace{2cm}}) : (4 + 4)$
2. Monday: Mon.: : Friday: _____

Geography

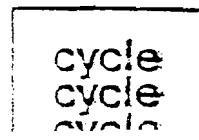

1. Which continent, South America or Africa, is closer to the Arctic Ocean?
2. Is the United States in the Northern or Southern Hemisphere?

Math

1. At what times does a digital clock show consecutive numbers?
(Hint: One time is 3:45.)
2. If there were 4 more children on a school bus, there would be 2 dozen children on the bus. How many children are on the bus?

Critical Thinking

1. What words do these stand for?



Language Arts

1. they will take there christmas vacation early
2. i will learn you more about the short story lost in the city
3. kevin visited canada in june but he couldnt stay long

Analogies

1. _____: wrong: : false: true
2. write: right: : beet: _____

Geography

1. The following are four of the largest countries in the world: (1) Russia, (2) Canada, (3) China, and (4) United States. On what continents can they be found?
2. What is the name of the large island due south of Florida?

Math

1. Name two distances that you would describe in meters.
2. Name two distances that you would describe in kilometers.

Critical Thinking

1. What word contains three pairs of double letters adjacent to one another?
2. Start with the word **crease**. Make a new, two syllable word by replacing just one letter with a different letter.

Daily Language, Math, Geography, and Thinking Skills

Language Arts

1. my parents didnt find nothing at lincoln park
2. he has broke the table over their
3. dear frank
i doesnt think i can visit you in march
yours truly
andy

Analogies

1. $(8 + 7) : (\quad) :: (9 + 9) : (10 + 8)$
2. rehearse: practice: : grin: _____

Geography

1. What two oceans do **not** touch Australia?
2. Which of the Great Lakes is farthest east?

Math

1. In a tic-tac-toe grid,
 1. how many boxes have 4 sides?
 2. how many boxes have 3 sides?
 3. how many boxes have 2 sides?
 4. how many boxes are there all together?

Critical Thinking

1. Spell this word. _____
2. What is the difference between here and there?

Language Arts

1. he dont work for johnson pen company anymore
2. and too days ago we take our sister to mexico city
3. many times terry has sang the song called over the hilltop

Analogies

1. tennis: racket: : _____ : bat
2. conceal: _____: : contain: hold

Geography

1. What does a star on a map usually mean?
2. Which continent is larger in land area, Europe or Asia?

Math

1. Estimate $73 + 91$
A) less than 160
B) 160 - 170
C) 170 -180
D) over 180
2. Estimate 32×9
A) 3
B) 30
C) 300
D) 3000

Critical Thinking

1. Why did 1,000 people move to California in 1849?
2. What formed the Hawaiian Islands?

Language Arts

1. is it true hes unable to here you
2. on thursday he gots two letters from the foster machine company
3. before i knowed it, beth had gave me her old bicycle

Analogies

1. $+: - :: x : \underline{\hspace{2cm}}$
2. time: clock: : weight:

Geography

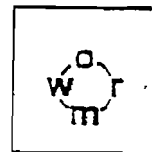
1. What three states come together where the Ohio River joins the Mississippi River?
2. What is the capital of Kentucky, the state known for its bluegrass?

Math

1. Write the number forty thousand thirteen.
2. $3 + 5 = 4 () 4$

Critical Thinking

1. What words or expressions do these stand for?



2. What does elevation mean?

Language Arts

1. the teacher replied mr and mrs steve carter will visit us write after lunch
2. he has learnt that the author of the book hot rod racer dont never grant interviews
3. my dad and his cousin isnt going to work at the j j frank company

Analogies

1. Tuesday: _____: Tues. : Sun.
2. true: untrue: : sense: _____

Geography

1. What ocean could you go swimming in if you were in California?
2. On a map, what do the black dots and dashes between the states usually represent?

Math

1.
$$\begin{array}{r} 235 \\ + 163 \\ \hline \end{array}$$

$$\begin{array}{r} 679 \\ + 57 \\ \hline \end{array}$$

$$\begin{array}{r} 348 \\ - 124 \\ \hline \end{array}$$

$$\begin{array}{r} 952 \\ - 248 \\ \hline \end{array}$$

2. Carol has 8 coins. Their total value is \$.78. What coins does she have?

Critical Thinking

1. What three-letter name of an animal can be rearranged to spell the name of a weapon?

Language Arts

1. she didnt have no luck with the too games
2. has brians friend ate a orange for lunch
3. the students knowed there multiplication facts good

Analogies

1. dawn: morning: : _____: evening
2. baseball: diamond: : tennis: _____

Geography

1. What three bodies of water border South America?
2. What is the capital of South Carolina?

Math

1. One strip of paper is 8 cm long. Another strip is 6 cm long. The two strips are taped together to make a strip that is 10 cm long. How long is the overlap?
2. Explain how you can solve these problems by addition.
 1. 4×3
 2. 5×6
 3. 2×9

Critical Thinking

1. What does a car, an elephant, and a tree have in common?
2. From what five-letter word can you take two letters and have only one left?

Daily Language, Math, Geography, and Thinking Skills

Language Arts

1. and my friend has learned me my shadow, a poem by robert louis stevenson
2. every halloween i think of owls hooting dogs barking ghosts moaning and doorbells ringing
3. jill and beth went to new orleans and bill stayed home

Analogies

1. Nile: Everest: : river: _____
2. raise: increase: : lower: _____

Geography

1. What four Great Lakes touch the state of Michigan?
2. Which of the four oceans does **not** touch the continent of North America?

Math

1. In one week a vendor sold 203 hot dogs, 197 chili dogs, and 100 pretzels. Figure out the total number of hot dogs, chili dogs, and pretzels the vendor sold that week.
2. How many different combinations of coins total exactly \$.31?

Critical Thinking

1. Spell this word. _____
2. Explain the different definitions for these two words: morning and mourning?

Language Arts

1. them boys will substitute for jim and i on our ball team
2. secretary
california chamber of commerce
sacramento ca 95801
3. marias birthday is in march and she has already learnt to swim

Analogies

1. $(9 + 9) : (20 - 2) :: (\quad) : (20 - 4)$
2. hopeful: $\quad ::$ hopeless: fearless

Geography

1. Which is larger in land area, China or Russia?
2. What natural feature forms Arkansas' eastern border?

Math

1. What numbers go in the blanks? Describe the patterns you used to find them.

1. 1, 3, 5, \quad , \quad
2. 55, \quad , 75, \quad , \quad , 105, 115
3. 33, \quad , \quad , \quad , 21, 18, 15
4. 64, 32, \quad , \quad , 4, \quad , 1

2.
$$\begin{array}{r} 3000 \\ \times 39 \\ \hline \end{array}$$
- $$\begin{array}{r} 294 \\ - 97 \\ \hline \end{array}$$
- $$\begin{array}{r} 100 \\ \times 75 \\ \hline \end{array}$$
- $$\begin{array}{r} 911 \\ \times 5 \\ \hline \end{array}$$

Critical Thinking

1. What do you find at the front of wrens but at the back of a crow?

Language Arts

1. the sweet tooth chocolate factory
highway 83
omaha ne 68132
2. but the brown chipmunks and gray squirrel isnt in our back
yard today
3. the sixth graders have choosed she to be the new student
president at west ridge school

Analogies

1. Apr.: April: : Dec.: _____
2. pod: pea: : ear: _____

Geography

1. What is the city, located on the Hudson River, that is the capital of the
state of New York?
2. Which state would have a warmer climate, Montana or Florida? Why?

Math

1. The following sentences are about a race involving three girls:
Olivia finished before Leah.
Leah finished after Carlotta.
Olivia finished before Carlotta.
1. Who finished first?
2. You can figure out the order in which the girls finished by using only
two sentences. Which sentence **don't** you need?

Language Arts

1. my mom she couldnt found her needle when she wanted too mend my jacket
2. i read a article on pollution called unsafe water in the magazine boys' life
3. sally went to mitchell field two watch the planes from acme airlines land

Analogies

1. firecracker: Independence Day: : _____: Halloween
2. find: lose: : build: _____

Geography

1. What two oceans touch the continent of Europe?
2. Write a definition for an island.

Math

1. How many zeros are in the number six thousand, six?
2. How many zeros are in the number fifty thousand, five hundred?

Critical Thinking

1. Which one is an occupation?
 - A) writing a letter to a friend
 - B) walking your dog
 - C) delivering mail for the Post Office

Language Arts

1. mr and mrs stoll have came to live in orlando florida
2. the Photographer drived hear too take a picture of lake michigan
3. 3005 pineapple lane
sioux falls sd 57100
november 10 1998

Analogies

1. Africa: Egypt: : continent: _____
2. mural : painting: : haiku: _____

Geography

1. The following are four of the largest countries in the world: Russia, Canada, China, and United States. What country, located in South America, also ranks as one of the ten largest?
2. Which is larger in land area, California or Missouri?

Math

1. At the end of a game, Martha was 30 points ahead of Sue. Bill was 25 points behind Tom. Sue was 15 points ahead of Tom.
 1. Who won the game?
 2. In what order did the other players finish?

Critical Thinking

1. What is always true about a desert?

Language Arts

1. mark has took mary jo too see 20,000 leagues under the sea, a long movie
2. 703 cherry hill road
san francisco ca 94100
march 6 1998
3. did you notice that tommy has growed a lot this year

Analogies

1. adjective: _____ : : adverb: adv.
2. croak: frog: : _____: owl

Geography

1. In what state are you probably located if you can see both the Gulf of Mexico and the Atlantic Ocean?
2. What is the capital of Georgia, the state known as the "Peach State"?

Math

1. What number is in the hundred's place in 6,748?
2. How many dimes are in a dollar?

Critical Thinking

1. Why is the United States known as "The Land of Immigrants"?
2. Spell this word. _____

Daily Language, Math, Geography, and Thinking Skills

Language Arts

1. billy thomas is more tall than scott roberts
2. bradford beach dont allow pets on the beach explained miss frank
3. after eating lunch the girls done there homework

Analogies

1. bumpy: flat: : _____: straight
2. weep: cry: : weary: _____

Geography

1. What state is due north of Hawaii?
2. On a map, what does the symbol of a blue line usually represent?

Math

1. Round 415 to the nearest hundred.
2. Round 2,232 to the nearest thousand.

Critical Thinking

1. What is a cash crop?
 - A) corn a farmer feeds to pigs
 - B) grass grown on a golf course
 - C) wheat sold to a flour mill
2. What does disarray mean in this sentence. My desk is in disarray.

Language Arts

1. yesterday taffy, my pet dog, would not due his stunt for me and betty
2. and jerry has fell off his bike and he has broke his arm
3. im only ten years old but i wanna be a doctor someday

Analogies

1. ballet: _____ :: opera: singer
2. _____ : cat: : wolf: dog

Geography

1. What are the only two continents totally north of the equator?
2. Name the four oceans of the world.

Math

1. What number is 3 thousands, 4 tens, and 6 ones?
2. What number is halfway between 300 and 400?

Critical Thinking

1. What expressions do these stand for?



2. Which landform changes slowly over time?
 - A) lava out of a volcano
 - B) wind blowing against a mountain
 - C) an earthquake cracking the land

Daily Language, Math, Geography, and Thinking Skills

Language Arts

1. last thanksgiving we eat turkey potatoes dressing and pie for dinner
2. would you please run a race with me around the school gym
asked bonita
3. dear sir or madam
please send me a copy of your magazine called news explorer

sincerely yours
robbie taylor

Analogies

1. $(12 + 7) : (25 - 6) :: (13 + 4) : \underline{\hspace{2cm}}$
2. emerald: green :: ruby:

Geography

1. What ocean borders Florida on three sides?
2. Which continent extends farther south, Australia or South America?

Math

1. How much is 6 dimes, 3 nickels, and 2 half dollars?
2. The time is 3:20. What time was it 30 minutes ago?

Critical Thinking

1. How is the mineral coal obtained?
2. What happens during a drought?

Language Arts

1. mardi gras has took place in new orleans on canal street every Year
2. me and my brother didnt collect sea shells near lake itaska
3. has you rode my new bike

Analogies

1. quart: qt: : _____: pt
2. heal: physician: : _____: thief

Geography

1. Carson City is the capital of what state?
2. Which continent is due south of Italy and Greece?

Math

1. $6 \overline{)205}$ 47 4000 418
 $\times \underline{2}$ $\times \underline{7}$ $\times \underline{5}$

2. $4 + 5 + 2 = 5 + ? + 4$ What number are you missing?

Critical Thinking

1. Which one comes first in alphabetical order?
 anyone
 anybody
 anything